



पुर्ना International School
Shree Swaminarayan Gurukul, Zundal

Class : Junior K.G

Math

Sample Book

2020 – 21

Prepared by Shuchi

Chavda



Write Numbers 31 to 40.

31				
32				
33				
34				
35				
36				
37				
38				
39				
40				

Count the objects and write the correct number.


1)



How many?



2)



How many?



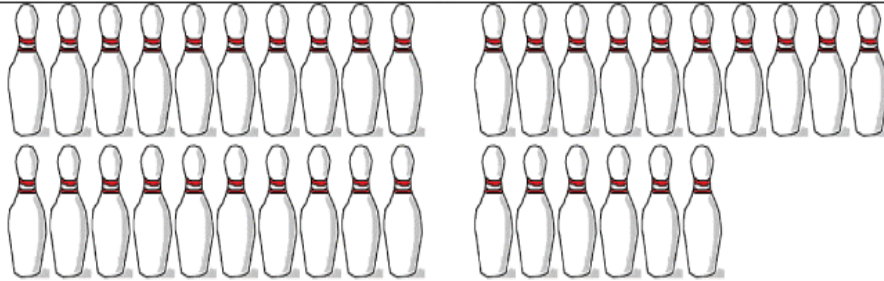
3)



How many?




4)



How many?




5)



How many?



6)



How many?



Write the missing number.

The image shows four trains, each consisting of a locomotive and a single car. The locomotives have smoke coming out of their chimneys. The cars contain a sequence of numbers with some missing. The numbers are arranged in a row within each car, with empty boxes for the missing numbers.

1		3		5		7		9	10
---	--	---	--	---	--	---	--	---	----

11		13		15		17		19	20
----	--	----	--	----	--	----	--	----	----

21		23		25		27		29	30
----	--	----	--	----	--	----	--	----	----

31		33		35		37		39	40
----	--	----	--	----	--	----	--	----	----

Write the before and after number.

4

18

7

27

3

33

5

41

9

29

11

32



Write the number names from 21 to 30.

21	Twenty – one		
22	Twenty – two		
23	Twenty – three		
24	Twenty – four		
25	Twenty – five		
26	Twenty – six		
27	Twenty – seven		
28	Twenty – eight		
29	Twenty – nine		
30	Thirty		